



**NEW G.M.T. SEN. SEC. PUBLIC SCHOOL**

**Haibowal Kalan, Ludhiana**

# **HOLIDAYS HOMEWORK**

**Class: VI**

**Session: 2024-25**

**Name: \_\_\_\_\_**

# ***HURRAY! IT'S TIME FOR FUN AND PLAY! IT'S TIME FOR HOLIDAYS***

*Dear parents,*

*Holidays are time when you can connect with your child in many ways. As parents are the first and the most important teacher for a child, we can encourage our child to participate in many educational activities at home and promote his/her quest to learn. Working together will not only help your child to build, learn and develop his/her skills but also strengthen your bond with him/her.*


## **General Instructions:**

- ✓ Appreciate Nature- Go for long walks in a park or garden with your family and friends.
- ✓ Good manners are the key- Respect your parents, grandparents and all elders. (Use three magical words-Sorry, Please and Thank you)
- ✓ Stay fit, Stay healthy-Play your favourite game/sport regularly.
- ✓ Learn about your heritage- find sometime to visit museums and monuments.
- ✓ Save nature- Contribute to save our precious environment. Minimize the wastage of resources like water, fuel and electricity.
- ✓ Must do-Eat healthy food and drink lots of water and juices.
- ✓ Read newspaper every day.
- ✓ Watch less of T.V. and restrain the use of mobiles.

***“HOLIDAYS ARE NOT ONLY MEANT FOR RELAXATION AND FUN BUT ALSO FOR SELF IMPROVEMENT AND GROWTH. EMBRACE THE OPPRTUNITY OF HOLIDAY HOMEWORK TO IGNITE YOUR CURIOSITY, EXPAND YOUR KNOWLEDGE AND UNLOCK YOUR POTENTIAL”***

## Tasks:

- ❖ Write ten pages of beautiful English cursive writing (To be done in HHW notebook).
- ❖ बेटी पंन पेन मुल्लेध लिधे । (To be done on Holidays Homework notebook)
- ❖ दस पृष्ठ सुलेख लिखाई में लिखें। (To be done on Holidays Homework notebook)
- ❖ संज्ञा किसे कहते है और इसके भेद बताते हुए एक सुंदर चित्र सहित चार्ट बनाएं। (Use full size chart)



- ❖ Prepare an inspirational wall-hanging. Write any 5-6 moral values on it and decorate it with waste material.  
(<https://www.youtube.com/watch?v=BzF4zRo2Fiw>)
- ❖ Make a collage on 'Unity in Diversity' of India on the full chart. (**Roll no. 1-17**), Make a full chart on 'Swachh Bharat Abhiyan' (**Roll no. 18 onwards**)
- ❖ Write Biography of following Indian Mathematicians along with their contribution in the field of mathematics i.e.
  - (a) Aryabhata (**Roll No. 1 to 16**)
  - (b) SriNivas Ramanujan (**Roll No. 17 onwards**)

\* Do this work on scrap book along with the pictures of mathematicians.
- ❖ **For all Subjects:** Revise all the work done in the class and do written practice of all the work in a separate notebook.



**Subject related work:**


<b>Subject</b>	<b>Description</b>	<b>To be done on</b>
<b>English</b>	A book or story review- Read a book, a biography, a drama or some other factual description. On the basis of your reading, complete the following information and write a review in 50-60 words. i.e. Title of the book, Publisher, Number of pages, Price, Quality of paper, contents, characters, your opinion etc.	On Assignment Sheets
<b>Social Science</b>	Art Integrated work: Describe festivals, flora and fauna and soils of Punjab and Odisha and paste pictures for the same.	On Assignment Sheets
<b>Maths</b>	Art Integrated work: Comparison between number of males and females of two states i.e. 'Punjab and Odisha'.	On Assignment Sheets
<b>Hindi</b>	भगवान श्री कृष्ण के कई नाम है  श्री कृष्ण के चित्र एक लगाए और उनके अलग-अलग रूपों के नाम लिखें   (for reference see page no. 34 Hindi literature)	On Assignment Sheets

## Assignments:

### ENGLISH (To be done on single line project sheets)

1. With every letter of your name, write an adjective that describes you. Remember you are the very best, so use only the best words for yourself. For example:

Letters	Qualities
J	Joyful
A	Ambitious
S	Strong
D	Dutiful
E	Elegant
E	Efficient
P	Peaceful



2. Read the beautiful poem given below and answer the questions that follow:

#### *The Fisherman*

The fisherman goes out at dawn  
When everyone's abed,  
And from the bottom of the sea  
Draws up his daily bread.

His life is strange; half on the shore  
And half upon the sea-  
Not quite a fish, and yet not quite  
The same as you and me.

The fisherman has curious eyes;  
They make you feel so queer,  
As if they had seen many things  
Of wonder and of fear.

He knows so much of the boats and tides,  
Of winds and clouds and sky!  
But when I tell of city things  
He sniffs and shuts one eye!

*Abbie Farwell Brown*

**Tick the most appropriate option.**

A. From the bottom of the sea, the fisherman draws up

- i. pearls    ii. loaves of bread    iii. water    iv. fish

B. The fisherman is different from other people because

- i. he is an early riser            ii. he spends half his life upon the sea  
iii. he can swim well            iv. he leads a dull life

C. The fisherman has a thorough knowledge of

- i. life in the city                    ii. tides and boats  
iii. large ships and steamers    iv. treasures in the sea

D. Does the fisherman know much about city life? Does he feel interested in learning?

E. Write some words to describe the life of a fisherman.

**3. Read the following passage of comprehension and answer the following:**

Students often complain of being overworked. The burden of heavy syllabi and the pressure of performing well in all examinations keep them tense all the time. High expectations of their parents make their situation even more miserable. As a result, even very young children have started suffering from tension and depression, two ailments quite unfamiliar to our great grandparents.



There is a simple technique, which, if applied sincerely, can keep the students relaxed. Don't be frightened by the large amount of work you are required to do. Concentrate on only the work in hand, treating the rest of the work as if it did not exist. Think of the one race you are running. Think of the one lesson you are learning. This will help you to achieve more without getting tense.

Finding a huge pile of books on a young student's table, an elderly person in the neighborhood said. "What a burden, my son! I pity you. How do you manage?" "I don't think of all the work I have to do," said the student. "I focus on only the lesson I'm reading at the moment. So, I don't feel overworked at all."

This student's style of working makes an important point relevant to all of us.

**Tick the most appropriate option.**

a. An important reason for stress in children is.....

- (i) the load of heavy syllabi            (ii) frequent examinations  
(iii) demanding teachers            (iv) lack of concentration

b. Think of the one race you are running means.....

- (i) we should try our best to win            (ii) we should not give up.

- (iii) we should run only one race in a day
- (iv) we should focus on one thing at a time
- c. How you can achieve more without getting tense?
- d. Complete the following sentences:

The young student did not feel overworked because.....

C. What simple technique has been suggested in the passage to help the students keep relaxed? Explain the technique with examples.

D. "Syllabi" is the plural form of 'syllabus'. Write the plural form of the following words: (i) radius (ii) focus

E. The word 'overworked' has been formed by adding the prefix 'over' to 'worked. Add the prefix over to these words and use the new word prefix over to your own:

Take, see, come, grown, spend.


4. Imagine yourself as the junior sports captain of your school. Draft a notice in not more than fifty words about an inter-school kabaddi match for students of class VI to VIII. Put all relevant information such as time, venue and selection procedure.

5. Write an Informal letter to your cousin who has just gone abroad to study, asking her about the new country, what his/her classes/friends/ teachers are like.

6. Solve the grid given on page no. 21 of grammar book.

7. Solve Part A given on page no. 20 of grammar book.

8.



Reflexive Pronouns are used to refer back to the subject of a sentence. They should match the subject. The reflexive pronouns always end in - self or - selves.

Write the correct reflexive pronoun that makes the statement correct. You can use reflexive pronouns in the box twice.

herself	ourselves	myself	Itself
himself	themselves	yourself	yourselves

1. I saw \_\_\_\_\_ in the mirror.
2. The dog ran \_\_\_\_\_ into the fence.
3. Did you make this \_\_\_\_\_?
4. We hurt \_\_\_\_\_ at the beach.
5. The soldiers pulled \_\_\_\_\_ up the wall.
6. Abang bought \_\_\_\_\_ an ice-cream.
7. My sister made \_\_\_\_\_ a new skirt.
8. Children! Please help \_\_\_\_\_ to the food.
9. The monkey swings \_\_\_\_\_ from tree to tree.
10. I patted \_\_\_\_\_ for a job well done.



9. Write the plural forms of these nouns: bacterium, datum, criterion, phenomenon, fungus, syllabus, crisis, oasis, vertex, vortex, matrix, appendix.

10. Choose the suitable adverb to complete each sentence:

a. He's always in a rush. I don't understand why he walks so..... (quick/quickly).

b. I prefer studying in the library. It's always..... (quiet/quietly).

c. Rohan .....(happy/happily) took up the job he was offered.

d. Martha dances..... (beautiful/beautifully). She's been taking ballet lessons since she was five years old.

e. They speak French very..... (good/well). They were in France for several years.

f. My neighbour always plays..... (loud/loudly) music. It's so annoying.

g. Please be..... (careful/carefully) in the hallway. The walls have just been painted.

h. Dan is intelligent but he is not a very..... (good/well) sportsman.

i. He reacted ..... (angry/angrily) to the news. I have never seen him so upset.

j. We didn't..... (complete/completely) understand the teacher's instructions. Most of us did not finish the assignment.

### **SOCIAL SCIENCE: (To be done on single line project sheets)**

#### **I. Choose the correct answer:**

1. You can see the full moon only once in about a month's time. It is ..... or Poornima.

(i) Full moon night

(ii) no moon night

(iii) half moon light

2. The sun, the moon and all those objects shining in the night sky are called.....

(i) solar system

(ii) celestial bodies

(iii) constellations

3. One of the most easily recognisable constellation is the .....

(i) Guruji

(ii) Maharishi

(iii) Saptarishi

4. The word ..... means 'wanderers'. comes from the Greek word "Planetai" which

(i) 'Planet'

(ii) 'Solar System'

(iii) 'Sun'

5. All the eight planets of the solar system move around the sun in fixed paths. These paths are elongated. They are called .....

(i) spongy

(ii) orbits

(iii) repeats



## II. Match the following:

- |            |   |
|------------|---|
| 1. Mercury | the ultimate source of heat and light for the solar system. |
| 2. Venus   | smallest planet   |
| 3. Earth   | natural satellite   |
| 4. Moon    | Blue planet   |
| 5. Sun     | Earth-Twin  |

## III. Assertion and Reasoning Based Questions :

- Both A and R are true and R is the correct explanation of A.
- Both A and R are true but R is not the correct explanation of A.
- A is correct but R is wrong.
- A is wrong but R is correct.

1. Assertion: People in Kerala practice different religions.

Reasoning: Kerala is surrounded by sea on all sides.

2. Assertion A little agriculture is possible in Ladakh.

Reasoning: This is due to adverse climatic conditions.

3. Assertion: The sun is a planet.

**Reasoning: All celestial bodies which have their own light are termed as stars.**

## IV. Case Study:

When we fix people into one image we create a stereotype. When people say that those who belong to a particular country, religion, sex, race or economic background are “stingy,” “lazy,” “criminal” or “dumb,” they are using stereotypes. Stereotypes affect all of us as they prevent us from doing certain things, that we might otherwise be good at. Discrimination happens when people act on their prejudices or stereotypes.

- How do stereotype affect all of us?
- Define discrimination.
- What term do we use when we create a particular image of some people in our minds?
- What are the different terms we use as stereotypes for people belonging to particular country the region, sex, race or economic background?

V. The temperature of the Earth is rising gradually over the years. This is known as Global warming. Global warming is not good for our environment. Discuss with your parents and note down the steps you can take to control it.

## VI. Map Work;

On the political map of India mark the Southern states of India.

VII. Solve the Solar system cross word puzzle:



VIII. Diversity And Terms You Must Know! Word Search:

# WORD SEARCH PUZZLE

## DIVERSITY



The words appear UP, DOWN, BACKWARDS, and DIAGONALLY. Find and circle each word.

E	Z	V	U	X	F	T	O	L	E	R	A	N	C	E
W	F	A	J	N	E	R	I	O	E	L	X	Z	G	L
R	A	I	C	S	D	B	E	L	I	E	F	R	S	N
E	I	N	Y	V	U	E	F	E	C	F	E	K	I	Q
U	R	N	T	O	C	F	R	A	D	S	C	N	C	E
S	D	O	I	E	A	P	E	S	P	O	C	A	E	C
E	I	V	T	M	T	P	M	E	T	L	M	C	L	N
U	Y	A	N	O	I	T	C	X	U	A	S	G	E	A
N	N	T	E	C	O	T	S	S	T	N	N	B	B	T
I	O	I	D	L	N	X	I	E	Y	W	E	D	R	P
Q	M	O	I	E	X	O	N	U	P	Q	M	A	E	C
U	R	N	R	W	N	A	K	U	G	L	U	J	T	C
E	A	S	P	C	U	L	T	U	R	E	A	F	I	C
Z	H	Y	T	I	N	U	M	M	O	C	L	V	O	A
U	W	J	Y	L	E	A	R	N	I	N	G	L	N	I

ACCEPTANCE  
BELIEF  
CELEBRATION  
COMMUNITY  
CULTURE  
EDUCATION

EQUAL  
FAIR  
FREEDOM  
HARMONY  
IDENTITY  
INCLUSION

INNOVATION  
LEARNING  
PEACE  
PRIDE  
RESPECT  
TOLERANCE

UNDERSTAND  
UNIQUE  
VALUES  
WELCOME



**IX. Write a short note on 'Dr A.P.J Abdul kalam' on A4 size sheet in a beautiful manner.**



**Dream** Is not that  
which you see while sleeping  
It is something that  
**Does Not Let You Sleep.**

-Dr. A. P. J. Abdul Kalam

### **SCIENCE (To be done on single line project sheets)**

#### **Activity: Nutrients**

To find out the nutrients present in different packed food (health drinks- Real Juice, Maza, Amul Butter milk. etc.)

Procedure:

1. Collect 5 packed items that are available in market.
2. Make a list of nutrients found in them.
3. Find out the amount of each of the nutrients present in them.
4. Note down your observations.
5. From your observations, which food items are good or not good for your health.

To Be Done on: Scrap Book

**Chart:** Make a full size chart with picture of scientist, brief introduction about scientist and their achievements. (Letter size: 4 to 5 inch; photo size: 20×20 cm minimum)

- i) Sir C.V. Raman ( Roll no. 1 to 6)
- ii) Dr. APJ Abdul Kalam (Roll no. 6 to 12)
- iii) Homi J. Bhabha (Roll no. 12 to 18)
- IV) Sir J. C. Bose ( Roll no. 18 to 24)
- v) Kalpana Chawla (Roll no. 25 to 30)
- vi) Vikram Sarabhai (Roll no. 31 to 36)

Hands on Activity: Grow any seasonal plant on world environment day (5th June) with the help of your parents. Click the photograph during plantation, after 1 week and after 2 weeks and see the changes. Paste these pictures in your scrap book and write the importance of this plant.

Bring plant on the first day of reopening of school.

#### **Working model:**

- 1.) Homemade volcano (Rollno.1, 5, 9, 13, 17, 21, 25, 29, 33)  
YouTube link: <https://youtu.be/xo-qToC1slY?si=7H7saaUHVZGFWc3i>
- 2.) Hot air balloon (homemade) (Rollno.2, 6, 10, 14, 18, 22, 26, 30, 34)



YouTube link: <https://youtu.be/Fpk7RwJOYt8?si=TmY0Q3VkPvL2o-Kh>

3.) Rain gauge (RollNo.3, 7, 11, 15, 19, 23, 27, 31, 35)

YouTube link: <https://youtu.be/FqTGA0ggeOE?si=KatJtcuHLdyDOoVD>

4.) Homemade 4 stage water purifier (Rollno.4,8,12,16,20,24,28,32,36)

YouTube link: <https://youtu.be/7IDRRklol8Q?si=WnuyAn79PNJLxDHB>

**Assignment: (On assignment Sheets)**

1.) During summer holidays, a group of children collected a lump of salt, green grass, broken glass piece, a small thermocol box, pen, iron nail, glass marbles, hair, naphthalene ball, a piece of sugar candy (mishri) and tried to group them on the basis of properties given in Table below. Help them in filling the Table.

Name of the material	Appearance (Hard/Soft)	Transparency (Translucent/Opaque/Transparent)	Floats/Sinks in Water	Soluble/Insoluble in Water

2.) Prepare a food pyramid of nutrition and some commonly eaten food item?

3.) List the parts of following plants which can be used as food:

A) Mustard plant \_\_\_\_\_

B) Coconut tree \_\_\_\_\_

C) Groundnut \_\_\_\_\_

D) Banana plant \_\_\_\_\_

E) Lotus plant \_\_\_\_\_

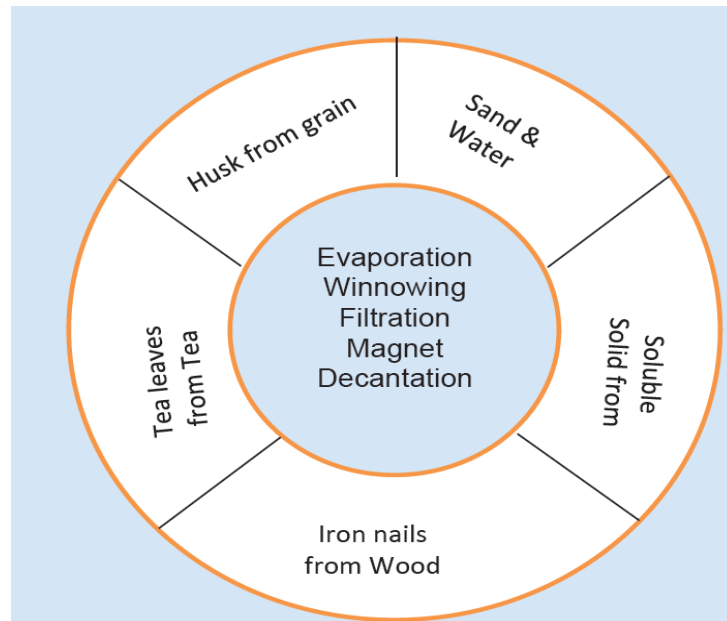
4.) What seems more nutritious to you and why?



5.) Complete the following table:

Vitamin/Mineral	Deficiency disease/disorder	Symptoms	Suggested food/ways to cure disease
Vitamin A			Yellow fruits
Iron	Anaemia		
Vitamin D		Weak and bent bone	
Iodine			Iodised salt, sea food
Calcium			

6.) Choose the correct method of separation from the inner circle of wheel to separate the components of the mixtures given in the outer box.




7) Solve crosswords puzzle:

Down

1. Opaque material which we got from trees
3. Water is a \_\_\_\_\_ liquid
7. Vinegar is \_\_\_\_\_ in water

Across:

2. Cotton is a \_\_\_\_\_ materials
4. The materials which are difficult to compress are known as \_\_\_\_\_
5. Iron, copper, aluminum is called \_\_\_\_\_
6. The materials, through which objects can be seen, but not clearly, are known as \_\_\_\_\_
8. Shiny appearance is termed as \_\_\_\_\_



8) Who am I?

- (a) I provide protection and insulation to your body in cold weather along with large amount of energy.
- (b) I am a vitamin made by our body in presence of sunlight.
- (c) I help our body to fight against cold and boosts our immunity.
- (d) I help to remove undigested food from our body.
- (e) I am responsible for proper night vision.
- (f) I help in the growth and repair of our body.
- (g) I am instant source of energy, so my demand increases while doing physical activities.

9) Read the passage and answer following questions:

Raman Collected samples of vinegar, lemon juice, mustard oil or coconut oil, kerosene or any other liquid. Took a glass tumbler.Filled it up to half with water. Added a few spoonful's of one liquid to this and stir it well. Let it stand for five minutes. Observe whether the liquid mixes with water. Repeat the same with other liquids, as vinegar, lemon juice, coconut oil, kerosene etc. many different liquids as are available to you.

i) The liquid that floats on water is



a) milk                      b) coconut oil                      c) alcohol    d) all of these

ii) The liquids that do not dissolve in water are called

a) Soluble    b) Insoluble                      c) Miscible    d) Immiscible

iii) ..... is universal solvent.





a) Milk                      b) Water    c) Both                      d) None of the above

iv) Objects that float on water are ..... than water.

a) Heavier    b) Lighter    c) Soluble    d) Insoluble

10) Picture Talk:

**Picture talk**

	Deficient nutrient : _____ Deficiency disease : _____
	Deficient nutrient : _____ Deficiency disease : _____
	Deficient nutrient : _____ Deficiency disease : _____
	Deficient nutrient : _____ Deficiency disease : _____

**MATHEMATICS: (To be done on single line project sheets)**

1. Find the difference between the number 23,486 and that obtained on reversing its digits.
2. Make the smallest and greatest 5-digits number by using the digits 3,7,5,8,9 with the given conditions: (a) digit 3 is always at the hundreds place. (b) digit 5 is always at the thousands place.
3. In a glass factory, 2,67,000 glasses are manufactured every month. What is the total production for 5 months?
4. Round off the numbers to the nearest 1000 and then perform the calculations. (a)  $8345 - 6784$  (b)  $8435 \div 3658$

5. Using the number line, subtract:

(a) 3 from 3

(b) 15 from 12

6. What should be subtracted from the sum of 26,08,119 and 12,74,521 to get 2,85,584 ?

7. Add:- (a)  $41 + 7848 + (-234)$

(b)  $(-709) + (-4123) + (-678)$

8. Convert :- (a) 8kg 650 gm into g

(b) 31 km into mm

9. Convert Fahrenheit to Celsius 2

<i>Fahrenheit to Celsius</i>
Step 1) Subtract 32
Step 2) Divide by 1.8

### Examples

Convert 72°F into Celsius.

Step 1)  $72 - 32 = 40$

Step 2)  $40 \div 1.8 = 22.222$

Answer:  $72^\circ\text{F} = 22.2^\circ\text{C}$  to 1dp

Convert 14°F into Celsius.

Step 1)  $14 - 32 = -18$

Step 2)  $-18 \div 1.8 = -10$

Answer:  $14^\circ\text{F} = -10^\circ\text{C}$

Give your answers to 1 decimal place.

1)  $50^\circ\text{F} =$

13)  $20^\circ\text{F} =$

2)  $36^\circ\text{F} =$

14)  $61^\circ\text{F} =$

3)  $80^\circ\text{F} =$

15)  $0^\circ\text{F} =$

4)  $45^\circ\text{F} =$

16)  $57^\circ\text{F} =$

5)  $100^\circ\text{F} =$

17)  $203^\circ\text{F} =$

6)  $92^\circ\text{F} =$

18)  $34^\circ\text{F} =$

7)  $67^\circ\text{F} =$

19)  $7^\circ\text{F} =$

8)  $115^\circ\text{F} =$

20)  $88^\circ\text{F} =$

9)  $200^\circ\text{F} =$

21)  $345^\circ\text{F} =$

10)  $126^\circ\text{F} =$

22)  $-10^\circ\text{F} =$

11)  $104^\circ\text{F} =$

23)  $212^\circ\text{F} =$

12)  $39^\circ\text{F} =$

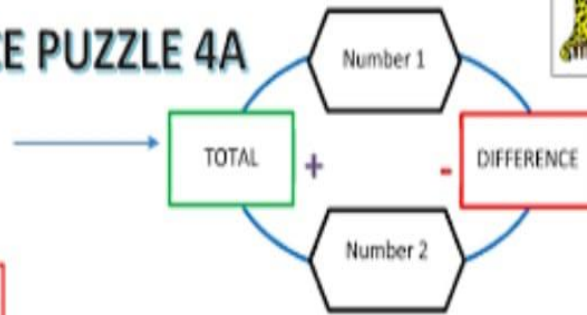
24)  $405^\circ\text{F} =$

10.

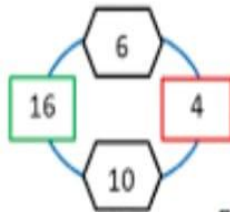
## TOTAL DIFFERENCE PUZZLE 4A



This is how the puzzle works!



Example



Fill in the missing numbers in the puzzles below!




## Hindi (To be done on single line project sheets)

1. मनुष्य जैसी संगति या मैत्री/मित्रता रखता है, उसके जीवन का रुख उसी और जाता है। सत्संगति का अर्थ है अच्छे या गुणवान लोगों का साथ, ऐसे लोगों के सुविचार हमारे जीवन को भी सही दिशा में ले जाते हैं। जिस प्रकार पारस का स्पर्श पाते ही सभी कुछ स्वर्ण हो जाता है, वैसे ही सत्संगति से हमारा भी मार्ग स्वर्ण या उज्ज्वल और मूल्यवान हो जाता है। बुरे काम करने वाले लोगों के चेहरे पर हमेशा एक तरह की कालिमा रहती है और ऐसे लोगों का साथ हमें भी मलिन विचारों का बना देता है। हम अपने अच्छे मित्रों से बहुत कुछ सीख सकते हैं। उनकी दिनचर्या पुस्तकों व खेलों में रुचि शिक्षा में उनका परिणाम इत्यादि से यह सब बातें हमें भी प्रभावित करती हैं। सत्संगति दीपक के समान है जिसके पास रहने से हमारा जीवन प्रकाशमान हो जाता है। विद्यार्थी जीवन में पड़ी अच्छी बुरी आदतें सदा उसके आचरण का हिस्सा बनी रहती है। अतः हमे अपनी संगति का चुनाव सोच समझ कर करना चाहिए।

क. सत्संगति का क्या अर्थ है ?

ख. कैसे विचार हमारे जीवन को सही दिशा में ले जाते हैं ?

ग. किसका स्पर्श बातें ही सभी कुछ स्वर्ण हो जाता है ?

घ. कैसे काम करने वाले लोगों के चेहरे पर हमेशा एक तरह की कालिमा रहती है ?

ड. विद्यार्थी जीवन में कैसी बड़ी आदतें आचरण का हिस्सा बनी रहती हैं ?

### 2. निम्नलिखित रेखंकित शब्दों के लिंग बदलकर वाक्य दोबारा लिखें।

क. गायक बहुत ही मधुर स्वर में गा रहा था।

ख. हाथी बहुत ही बलशाली है।

ग. हंस घायल था फिर भी तेज़ उड़ रहा था।

घ. राजकुमारी उदास थी।

ड. नौकर घर का सारा काम करता है।

### 3. निम्नलिखित रेखंकित शब्दों के विलोम बदल कर खाली स्थान भरिए।

क. सुबह तुम माँ के पास बैठना \_\_\_\_\_ को मैं देख लूंगा।

ख. अरे! तुम्हारा बस्ता तो बड़ा भारी है लेकिन मेरा \_\_\_\_\_ है।

ग. परीक्षा में कुछ प्रश्न सरल थे और कुछ \_\_\_\_\_।

घ. सख्त और \_\_\_\_\_ आम अलग-अलग कर दो।

ड. पूर्णिमा के बाद चंद्रकलाएँ घटने लगती हैं और अमावस्या के बाद \_\_\_\_\_ लगती हैं।

#### 4. निम्नलिखित विराम चिह्नों को उनके नामों से मिलाइए

- (-) हंसपद  
( ), { }, [ ] योजक चिह्न  
(^) विवरण चिह्न  
(:-) लाघव चिह्न  
(°) कोष्ठक चिह्न

#### 5. निम्नलिखित वाक्यों में रेखंकित शब्दों के वचन बदल कर वाक्य दोबारा लिखें।

क. लड़की खाना खा रही है।

ख. अच्छा आम दे दो।

ग. ऊँट बैठा है।

घ. यह मेरी वस्तु है।

ड. अध्यापक बैठे है।

#### 6. बाजार का भोजन रोगों का घर विषय पर 50 से 60 शब्दों में अनुच्छेद लिखें।

#### 7. निम्नलिखित शब्दों को वर्णमाला के आधार पर क्रम में लिखें।

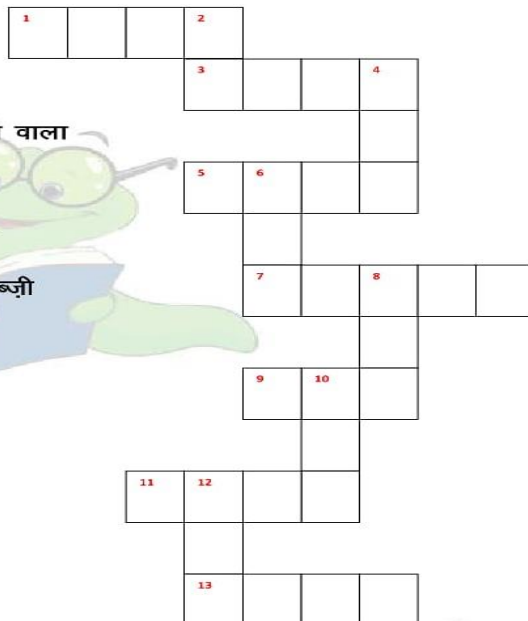
हार्दिक, बिजली, अध्यापिका, पुस्तक, वरदान, नमक, गणित, खुशहाली, दूध, फर्नीचर, भूमिगत, धन्यवाद, टुकड़ी, रात जीव जंतु

#### 8. निम्नलिखित वर्ग पहेली को सुलझाए।

##### वर्ग पहेली

निम्न वर्ग पहेली में बाँई ओर दिए निर्देश के अनुसार वर्ग पहेली पूरी करो —

- वर्णों का समूह
- ललाइन का पुल्लिंग शब्द
- रात में गाँवों में रोशनी देने वाला
- आँख का पर्यायवाची
- ईद के पहले वाला महीना
- दानेदार/फलियों वाली सब्जी
- राखी का त्योहार
- वानर का तद्भव शब्द
- विश्व का पर्याय
- समुद्र का तत्सम्
- अहं की भाववाचक संज्ञा
- हंस का स्त्रीलिंग
- नीला है कंठ जिसका



9. फलों का राजा 'आम' इसमें आम के खाने के फायदे और आम से कौन-कौन से व्यंजन तैयार किए जाते हैं उसके बारे में लिखें और आम का चित्र भी बनाएं।



10. निम्नलिखित चित्र को देखकर उस पर 5-6 पंक्तियां लिखें।



### ਪੰਜਾਬੀ (To be done on Assignment Sheets)

1. ਧੁਨੀ ਬੋਧ ਦੀ ਪਰਿਭਾਸ਼ਾ ਲਿਖੋ ਅਤੇ ਉਸ ਦੀ ਕਿਸਮਾਂ ਨੂੰ ਦਰਸਾਉਂਦਾ ਹੋਇਆ ਇੱਕ ਚਾਰਟ ਬਣਾਓ।
2. ਅੱਖਰਾਂ ਦੀ ਬਣਤਰ ਲੰਬਾਈ 6 ਸੈਂਟੀਮੀਟਰ ਚੌੜਾਈ 4 ਸੈਂਟੀਮੀਟਰ ਘੱਟ ਤੋਂ ਘੱਟ ਹੋਵੇ।
3. ਇੱਕ ਪਿਆਲਾ ਪਾਣੀ ਦਾ ਕਵਿਤਾ ਦਾ ਉਚਾਰਨ ਕਰਦੇ ਹੋਏ ਇੱਕ ਗੀਲ ਤਿਆਰ ਕਰੋ।
4. ਆਪਣੇ ਚਾਚਾ ਜੀ ਵੱਲੋਂ ਜਨਮਦਿਨ ਤੇ ਭੇਜੇ ਤੋਹਫੇ ਲਈ ਧੰਨਵਾਦ ਕਰਦੇ ਹੋਏ ਇੱਕ ਪੱਤਰ ਆਪਣੀ ਕਾਪੀ ਦੇ ਵਿੱਚ ਲਿਖੋ।
5. ਹੇਠਾਂ ਦਿੱਤੇ ਅਣਡਿੱਠੇ ਪੈਰੇ ਨੂੰ ਧਿਆਨ ਨਾਲ ਪੜ੍ਹੋ ਤੇ ਪੁੱਛੇ ਗਏ ਪ੍ਰਸ਼ਨਾਂ ਦੇ ਉੱਤਰ ਦਿਓ।  
ਓ) ਟੈਲੀਵਿਜ਼ਨ ਅੱਜ ਦੇ ਯੁਗ ਵਿੱਚ ਮਨੁੱਖ ਦੀ ਇੱਕ ਮੁੱਖ ਜਰੂਰਤ ਬਣ ਗਿਆ ਹੈ ਇਹ ਕੇਵਲ ਮਨੋਰੰਜਨ ਦਾ ਸਾਧਨ ਹੀ ਨਹੀਂ ਸਗੋਂ ਸਿੱਖਿਆ ਦਾ ਇੱਕ ਮਾਧਿਅਮ ਵੀ ਹੈ। ਟੈਲੀਵਿਜ਼ਨ ਨੇ ਦੁਨੀਆਂ ਦੇ ਸਾਰੇ ਦੇਸ਼ਾਂ ਨੂੰ ਇੱਕ ਦੂਜੇ ਦੇ ਬਹੁਤ ਨੇੜੇ ਲੈ ਆਉਂਦਾ ਹੈ। ਅੱਜ ਕੱਲ ਦੇ ਰੁਝੇਵੇਂ ਭਰੇ ਤੇ



ਤਨਾਓ ਪੂਰਨ ਜੀਵਨ ਵਿੱਚ ਇਹ ਮਨੁੱਖ ਲਈ ਇੱਕ ਮਸੀਹਾ ਬਣ ਕੇ ਆਇਆ ਹੈ। ਟੈਲੀਵਿਜ਼ਨ ਦੀ ਖੋਜ ਤੋਂ ਬਹੁਤ ਸਮਾਂ ਪਹਿਲਾਂ ਮਨੁੱਖ ਸਿਨੇਮਾ ਦੇ ਪਰਦੇ ਤੇ ਚਲਦਿਆਂ ਫਿਰਦਿਆਂ ਤਸਵੀਰਾਂ ਵੇਖਣ ਲੱਗ ਪਿਆ ਸੀ। ਇਸ ਨਾਲ ਟੈਲੀਵਿਜ਼ਨ ਬਣਾਉਣ ਵਿੱਚ ਬਹੁਤ ਮਦਦ ਮਿਲੀ, ਕਿਉਂਕਿ ਟੈਲੀਵਿਜ਼ਨ ਦਾ ਮੁੱਢਲਾ ਕੰਮ ਕਿਸੇ ਤਸਵੀਰ ਦਾ ਸੰਚਾਰ ਕਰਨਾ ਫਿਰ ਉਸਨੂੰ ਗ੍ਰਹਿਣ ਕਰਨਾ ਹੈ। ਟੈਲੀਵਿਜ਼ਨ ਦੁਆਰਾ ਅਸੀਂ ਦੂਰ ਦੁਰਾਡੇ ਪੇਸ਼ ਕੀਤੇ ਜਾ ਰਹੇ ਦ੍ਰਿਸ਼ ਨੂੰ ਇਨ ਬਿਨ ਕਰ ਬੈਠੇ ਵੇਖ ਸਕਦੇ ਹਾਂ। ਟੈਲੀਵਿਜ਼ਨ ਤੋਂ ਪਹਿਲਾਂ ਰੇਡੀਓ ਦੀ ਖੋਜ ਹੋਈ, ਪਰ ਮਨੁੱਖ ਦੇ ਮਨ ਵਿੱਚ ਦੂਰ ਬੈਠੇ ਵਿਅਕਤੀ ਦੀ ਆਵਾਜ਼ ਨਾਲ ਉਸ ਦੀ ਸ਼ਕਲ ਵੇਖਣ ਦੀ ਤੀਵਰ ਚਾਅ ਟੈਲੀਵਿਜ਼ਨ ਨੂੰ ਜਨਮ ਦਿੱਤਾ।

ਪ੍ਰਸ਼ਨ-(i) ਟੈਲੀਵਿਜ਼ਨ ਦੇ ਕੀ ਲਾਭ ਹਨ?

ਪ੍ਰਸ਼ਨ-(ii) ਟੈਲੀਵਿਜ਼ਨ ਬਣਾਉਣ ਵਿੱਚ ਕਿਸ ਨੇ ਮਦਦ ਕੀਤੀ?

ਪ੍ਰਸ਼ਨ-(iii) ਟੈਲੀਵਿਜ਼ਨ ਦਾ ਮੁਢਲਾ ਕੰਮ ਕੀ ਹੈ?

ਪ੍ਰਸ਼ਨ-(iv) ਮਨੁੱਖ ਦੀ ਕਿਸ ਰਾਹ ਨੇ ਟੈਲੀਵਿਜ਼ਨ ਨੂੰ ਜਨਮ ਦਿੱਤਾ?

ਪ੍ਰਸ਼ਨ-(v) ਇਸ ਪੈਰੇ ਦਾ ਸਿਰਲੇਖ ਲਿਖੋ।

ਅ) ਗੱਪ ਬਾਜ਼ ਲਗਭਗ ਆਪ ਬੇਕਾਰ ਰਹਿੰਦਾ ਹੈ, ਪਰ ਗੱਲਾਂ ਉਹ ਤਕੜੇ ਕਾਰੋਬਾਰੀਆਂ ਤੇ ਸੇਠਾਂ ਵਾਲੀਆਂ ਕਰਦਾ ਹੈ ਆਪ ਉਸ ਕਦੇ ਬਿੱਲੀ ਵੀ ਨਹੀਂ ਮਾਰੀ ਹੁੰਦੀ, ਪਰ ਉਹ ਆਪਣੇ ਆਪ ਨੂੰ ਸ਼ੇਰਾਂ ਦਾ ਸ਼ਿਕਾਰੀ ਦਰਸਾਉਂਦਾ ਹੈ। ਜਮੀਨ ਅਸਮਾਨ ਇੱਕ ਕਰਨ ਵਿੱਚ ਉਹ ਸ਼ੇਖ ਚਿੱਲੀ ਦਾ ਬਾਪ ਹੈ ਗੱਲ ਗੱਲ ਵਿੱਚ ਉਹ ਬੜੀਆਂ ਵੱਡੀਆਂ ਹਸਤੀਆਂ ਦੇ ਹਵਾਲੇ ਦਵੇਗਾ ਆਪਣੇ ਪਿੰਡ ਸ਼ਹਿਰੇ ਜਾਂ ਦੇਸ਼ ਤੋਂ ਕਦੀ ਉਹ ਬਾਹਰ ਨਹੀਂ ਨਿਕਲਿਆ ਹੁੰਦਾ ਪਰ ਗੱਲਾਂ ਬਾਤਾਂ ਵਿੱਚ ਉਹ ਜਰਮਨੀ ਰੂਸ ਅਮਰੀਕਾ ਦਾ ਜਿਕਰ ਕਰੇਗਾ।

ਪ੍ਰਸ਼ਨ-(i) ਗੱਪ ਬਾਜ਼ ਕਿੰਨਾ ਦੀਆਂ ਗੱਲਾਂ ਕਰਦਾ ਹੈ?

ਪ੍ਰਸ਼ਨ-(ii) ਕੌਣ ਆਪਣੇ ਆਪ ਨੂੰ ਸ਼ੇਰਾਂ ਦਾ ਸ਼ਿਕਾਰੀ ਦੱਸਦਾ ਹੈ ?

ਪ੍ਰਸ਼ਨ-(iii) ਗੱਲ ਗੱਲ ਵਿੱਚ ਗੱਪ ਬਾਜ਼ ਕਿਨਾਂ ਦੇ ਹਵਾਲੇ ਦਿੰਦਾ ਹੈ?

ਪ੍ਰਸ਼ਨ-(iv) ਆਪਣੇ ਪਿੰਡ ਸ਼ਹਿਰ ਜਾਂ ਦੇਸ਼ ਤੋਂ ਬਾਹਰ ਤੱਕ ਨਾ ਜਾਣ ਵਾਲਾ ਗੱਲਬਾਤ ਗੱਲਾਂ ਵਿੱਚ ਕਿਸ ਦਾ ਜਿਕਰ ਕਰਦਾ ਹੈ?

ਪ੍ਰਸ਼ਨ-(v) ਇਸ ਪੈਰੇ ਦਾ ਸਿਰਲੇਖ ਲਿਖੋ।

6. ਹੇਠਾਂ ਦਿੱਤੀ ਤਸਵੀਰ ਨੂੰ ਦੇਖ ਕੇ ਤਸਵੀਰ ਰਚਨਾ ਕਰੋ।



ੳ)



ਅ)

